









# Number Shape Addition to 10



Use the number shapes to work out the answers to each addition question.

 $+$  $=$

 $+$  $=$

 $+$  $=$

 $+$  $=$

 $+$  $=$

$$\begin{array}{|c|} \hline \text{O} \\ \hline \text{O} \\ \hline \text{O} \\ \hline \end{array} + \begin{array}{|c|} \hline \text{O} \\ \hline \text{O} \\ \hline \text{O} \\ \hline \end{array} =$$

$$\begin{array}{|c|} \hline \text{O} \\ \hline \text{O} \\ \hline \end{array} + \begin{array}{|c|} \hline \text{O} \\ \hline \text{O} \\ \hline \end{array} =$$

$$\begin{array}{|c|} \hline \text{O} \\ \hline \text{O} \\ \hline \end{array} + \begin{array}{|c|} \hline \text{O} \\ \hline \end{array} =$$

$$\begin{array}{|c|} \hline \text{O} \\ \hline \text{O} \\ \hline \text{O} \\ \hline \end{array} + \begin{array}{|c|} \hline \text{O} \\ \hline \text{O} \\ \hline \end{array} =$$

$$\begin{array}{|c|} \hline \text{O} \\ \hline \text{O} \\ \hline \text{O} \\ \hline \end{array} + \begin{array}{|c|} \hline \text{O} \\ \hline \text{O} \\ \hline \end{array} =$$

$$\begin{array}{|c|} \hline \text{O} \\ \hline \text{O} \\ \hline \text{O} \\ \hline \end{array} + \begin{array}{|c|} \hline \text{O} \\ \hline \text{O} \\ \hline \end{array} =$$