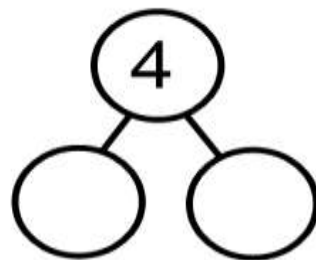
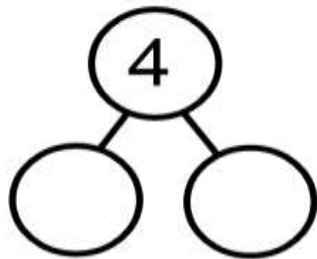
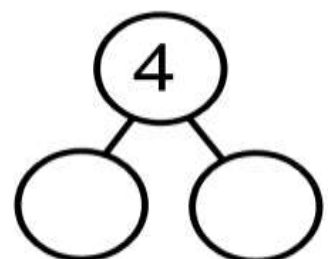
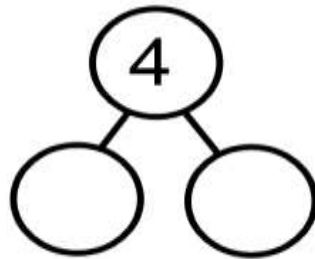
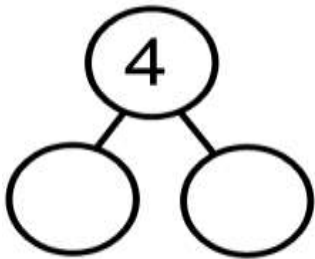


Name _____

Date _____

Can I work out the number bonds for 4 and 5?

Can you complete these part whole models in different ways?



Can you complete the bead strings in different ways



$$\boxed{5} = \boxed{5} + \boxed{0}$$

$$\boxed{5} = \boxed{4} + \boxed{1}$$

$$\boxed{5} = \boxed{} + \boxed{}$$

$$\boxed{} = \boxed{} + \boxed{}$$

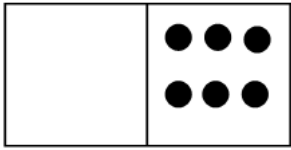
$$\boxed{} = \boxed{} + \boxed{}$$

$$\boxed{} = \boxed{} + \boxed{}$$


Name _____ Date _____

Can I work out the number bonds for 6 and 7?

Can you put 6 spots on each of these dominoes in different ways?




$$\boxed{0} + \boxed{6} = \boxed{6}$$




$$\boxed{} + \boxed{} = \boxed{6}$$



$$\boxed{} + \boxed{} = \boxed{6}$$



$$\boxed{} + \boxed{} = \boxed{6}$$



$$\boxed{} + \boxed{} = \boxed{6}$$




$$\boxed{} + \boxed{} = \boxed{6}$$

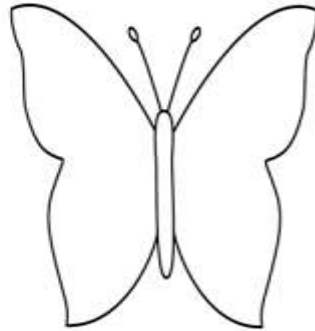


$$\boxed{} + \boxed{} = \boxed{6}$$


These butterflies have lost 7 spots each. Can you put them back, a different way each time:




$$\boxed{0} + \boxed{7} = \boxed{7}$$




$$\boxed{} + \boxed{} = \boxed{7}$$




$$\boxed{} + \boxed{} = \boxed{7}$$




$$\boxed{} + \boxed{} = \boxed{7}$$




$$\boxed{} + \boxed{} = \boxed{7}$$



$$\boxed{} + \boxed{} = \boxed{7}$$



$$\boxed{} + \boxed{} = \boxed{7}$$

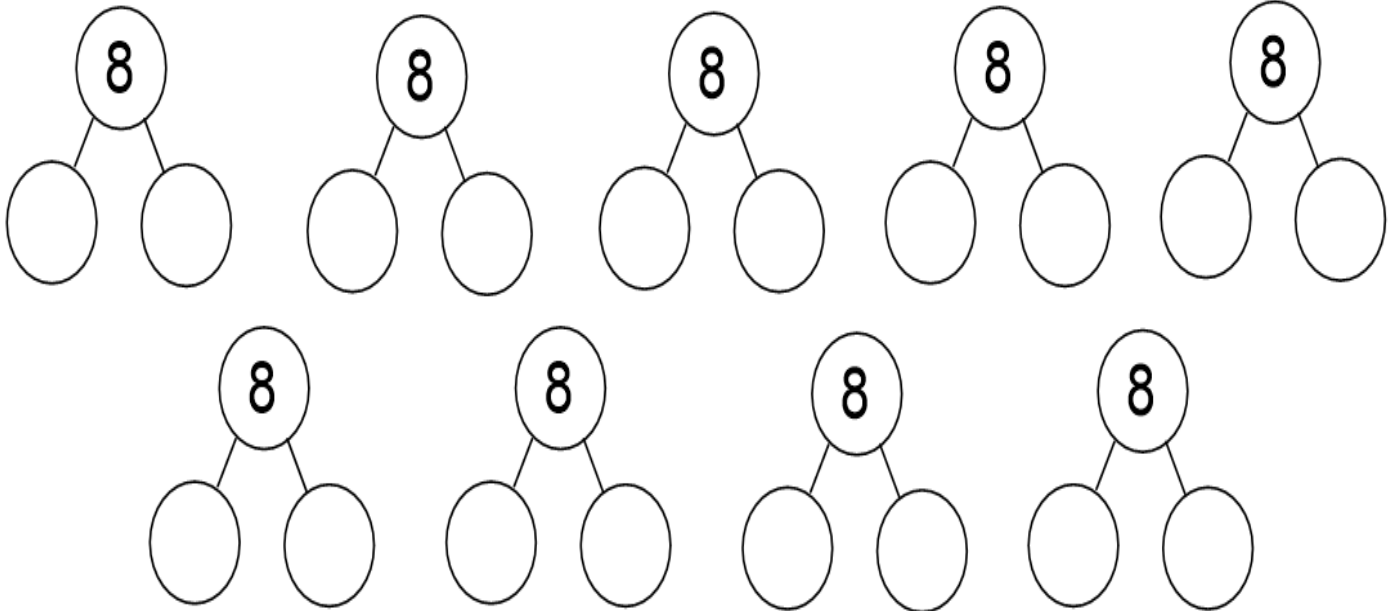


$$\boxed{} + \boxed{} = \boxed{7}$$

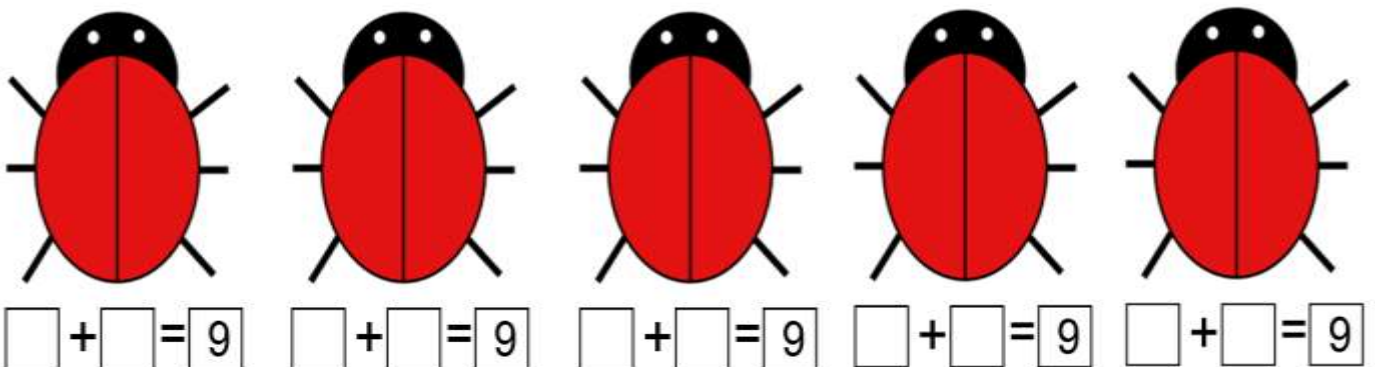
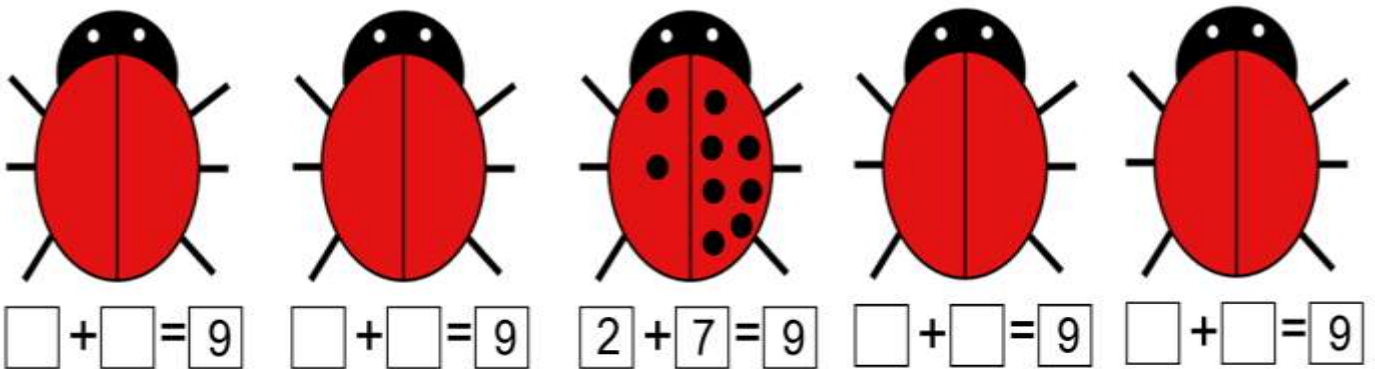
Name _____ Date _____

Can I work out the number bonds for 8 and 9?

Can you complete these part whole models, a different way each time?



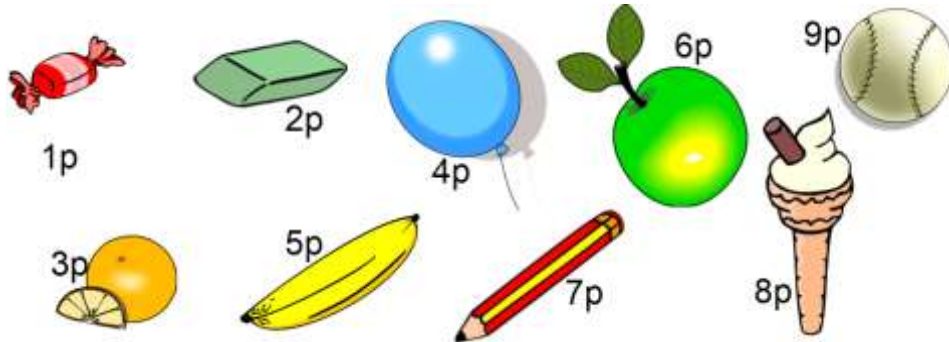
These ladybirds have all lost 9 spots. Can you put them back in a different way each time:



Name _____ Date _____

Can I work out the number bonds for 10?

Find pairs of items you can buy for a total of 10p



and and and

and and

If you buy these items how much change would you get from 10p?

Item	Change
