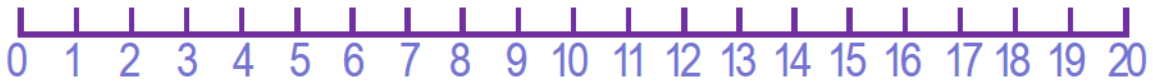




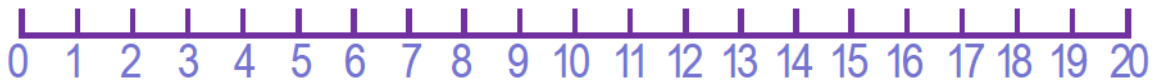
Hopping Back

Use the number line to help you work out these answers

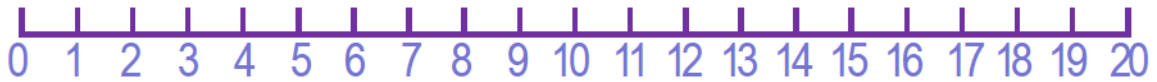
$14 - 5 =$



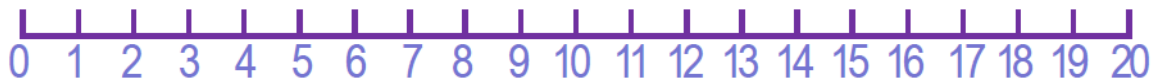
$18 - 2 =$



$20 - 7 =$



$15 - 4 =$



$20 - 9 =$



$19 - 2 =$

