


Name:

Date:

Circle Half


How many lemonade glasses can you count?



Circle half the glasses of lemonade.

How many is half?

How many watermelon slices can you count?




Circle half the watermelon slices.

How many is half?

Circle Half - 2


How many pineapples can you count?



Circle half the pineapples.

How many is half?

How many strawberries can you count?




Circle half the strawberries.

How many is half?

Circle Half - 3

How many cherries can you count?



Circle half the cherries.

How many is half?

