

Name:

Addition by Counting On

Fill in the missing numbers. Count on to find the answer.

$4 + 2 = 6$

-- + -- = □


-- + -- = □

-- + -- = □

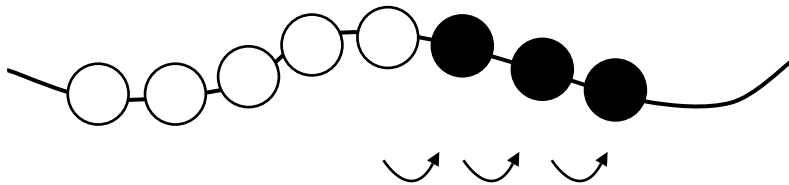
Name:

Addition by Counting On

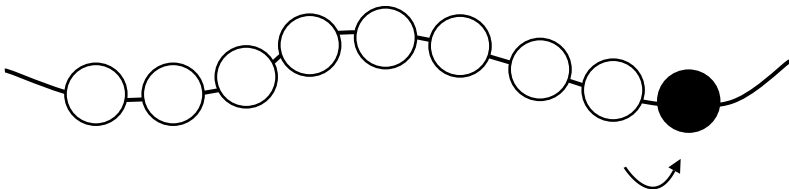
Fill in the missing numbers. Count on to find the answer.




$$\underline{6} + \underline{2} = \boxed{8}$$



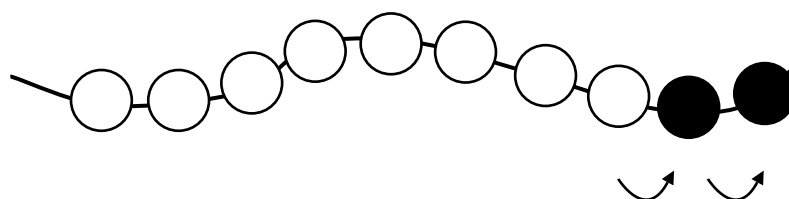
$$\underline{\quad} + \underline{\quad} = \boxed{\quad}$$



$$\underline{\quad} + \underline{\quad} = \boxed{\quad}$$



$$\underline{\quad} + \underline{\quad} = \boxed{\quad}$$

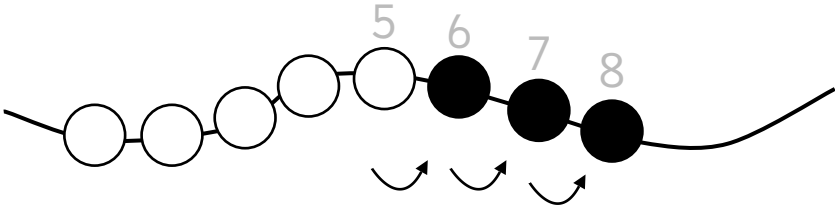
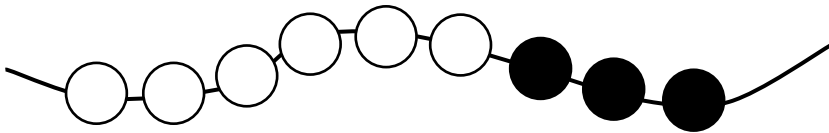


$$\underline{\quad} + \underline{\quad} = \boxed{\quad}$$

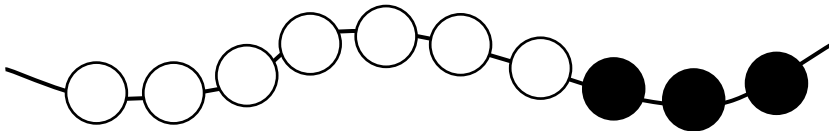
Name:

Addition by Counting On

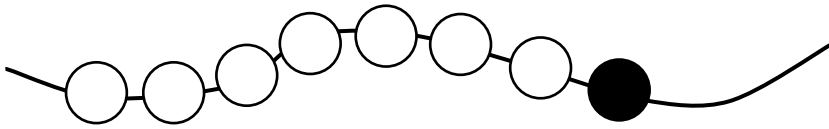
Fill in the missing numbers. Count on to find the answer.


$$\underline{5} + \underline{3} = \boxed{8}$$


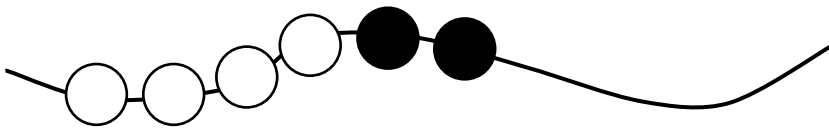
$$\underline{\quad} + \underline{\quad} = \underline{\quad}$$



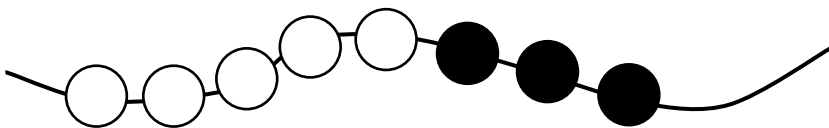
$$\underline{\quad} + \underline{\quad} = \underline{\quad}$$



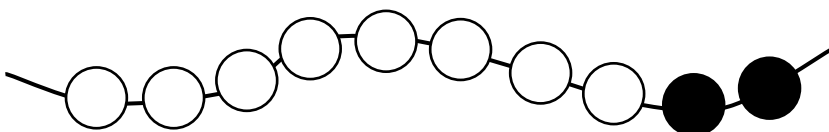
$$\underline{\quad} + \underline{\quad} = \underline{\quad}$$



$$\underline{\quad} + \underline{\quad} = \underline{\quad}$$



$$\underline{\quad} + \underline{\quad} = \underline{\quad}$$

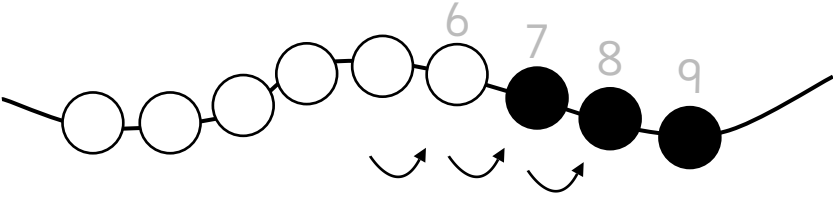
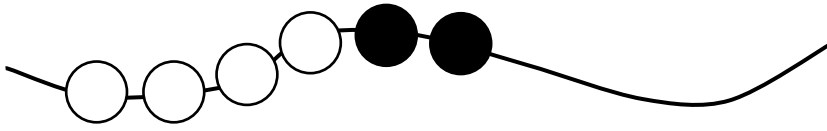


$$\underline{\quad} + \underline{\quad} = \underline{\quad}$$

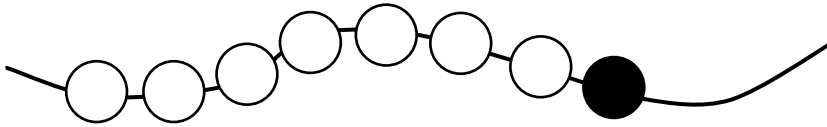
Name:

Addition by Counting On

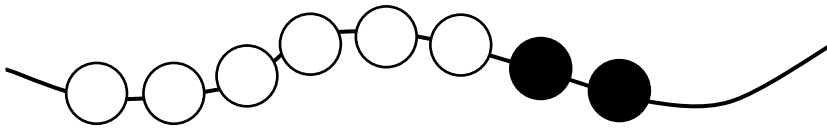
Fill in the missing numbers. Count on to find the answer.

 $_6_ + _3_ = \boxed{9}$ 

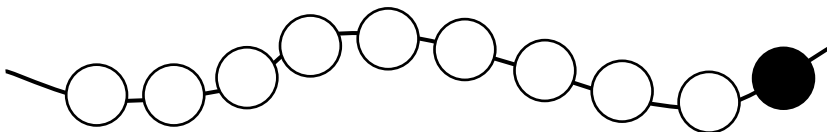
$_ _ + _ _ = _ _$



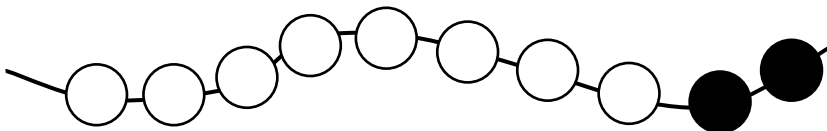
$_ _ + _ _ = _ _$



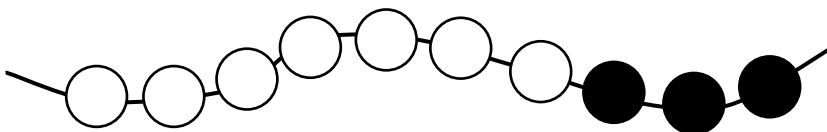
$_ _ + _ _ = _ _$



$_ _ + _ _ = _ _$



$_ _ + _ _ = _ _$



$_ _ + _ _ = _ _$